



Draw some to make more. Write the equation and the total.

1



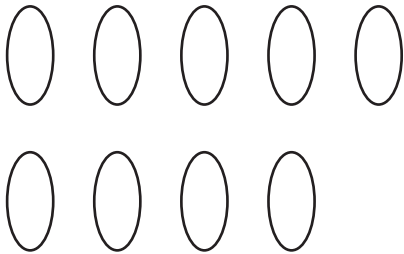
Draw **1** more.

2



Draw **2** more.


3



Draw **3** more.

4

Extend It Cross out some to make fewer. Write the equation and how many are left.



Cross out **2**.
